



Std : 1

1

30

Addition

2	6	8	7	6
+ 5	+ 3	+ 1	+ 1	+ 2
7	9	9	8	8

2	5	3	5	3
+ 2	+ 4	+ 3	+ 2	+ 5
4	9	6	7	8

7	4	3	2	1
+ 2	+ 3	+ 4	+ 3	+ 6
9	7	7	5	7

6	1	4	6	1
+ 0	+ 7	+ 2	+ 1	+ 4
6	8	6	7	5

Circle even number.

1	3	6	5	7
9	1	2	3	5
9	3	5	7	8
7	4	5	3	9
3	5	7	9	2

9	5	6	7	3
8	3	1	5	7
1	7	5	4	3
3	1	2	5	7
9	1	7	5	6

(A)

04



Std : 1

2

30

Subtraction

9	8	4	2	6
- 5	- 3	- 4	- 1	- 4
4	5	0	1	2

3	7	4	8	6
- 2	- 5	- 2	- 6	- 6
1	2	2	2	0

6	7	9	8	3
- 0	- 4	- 8	- 3	- 1
6	3	1	5	2

2	4	7	6	8
- 1	- 3	- 6	- 5	- 1
1	1	1	1	7

Circle odd number.

①	2	8	6	10
③	4	8	6	2
2	6	10	8	⑤
6	4	2	10	⑦
4	8	10	2	⑨

2	4	⑤	10	8
8	⑦	2	4	10
③	4	10	6	2
4	2	10	⑦	8
8	2	①	4	6

A

04



Std : 1

3

20

Addition (Horizontal)

$7 + 2 = \underline{9}$

$4 + 4 = \underline{8}$

$8 + 2 = \underline{10}$

$3 + 2 = \underline{5}$

$6 + 3 = \underline{9}$

$5 + 5 = \underline{10}$

$5 + 1 = \underline{6}$

$6 + 4 = \underline{10}$

$8 + 1 = \underline{9}$

$4 + 1 = \underline{5}$

$7 + 1 = \underline{8}$

$6 + 1 = \underline{7}$

$6 + 2 = \underline{8}$

$5 + 4 = \underline{9}$

$4 + 3 = \underline{7}$

$4 + 2 = \underline{6}$

$5 + 2 = \underline{7}$

$3 + 3 = \underline{6}$

$7 + 3 = \underline{10}$

$5 + 3 = \underline{8}$



Std : 1

4

20

Subtraction (Horizontal)

$8 - 7 = \underline{1}$

$7 - 6 = \underline{1}$

$8 - 3 = \underline{5}$

$4 - 3 = \underline{1}$

$6 - 2 = \underline{4}$

$9 - 8 = \underline{1}$

$6 - 4 = \underline{2}$

$5 - 3 = \underline{2}$

$9 - 6 = \underline{3}$

$7 - 5 = \underline{2}$

$5 - 2 = \underline{3}$

$6 - 3 = \underline{3}$

$6 - 5 = \underline{1}$

$7 - 4 = \underline{3}$

$5 - 1 = \underline{4}$

$6 - 2 = \underline{4}$

$8 - 4 = \underline{4}$

$9 - 7 = \underline{2}$

$4 - 2 = \underline{2}$

$4 - 1 = \underline{3}$



Std : 1

5

20

Find no. more than.1 **more** than 7 3 **more** than 4 2 **more** than 6 1 **more** than 5 3 **more** than 5 4 **more** than 2 4 **more** than 4 3 **more** than 6 2 **more** than 3 1 **more** than 6 3 **more** than 2 2 **more** than 4 4 **more** than 1 1 **more** than 8 1 **more** than 6 2 **more** than 6 2 **more** than 5 3 **more** than 1 4 **more** than 3 4 **more** than 2



Std : 1

6

20

Find no. less than.4 **less** than 7 1 **less** than 5 3 **less** than 6 2 **less** than 6 2 **less** than 8 3 **less** than 7 1 **less** than 4 4 **less** than 8 4 **less** than 9 3 **less** than 5 3 **less** than 3 4 **less** than 6 2 **less** than 4 6 **less** than 9 1 **less** than 2 2 **less** than 3 4 **less** than 5 1 **less** than 3 3 **less** than 4 4 **less** than 9

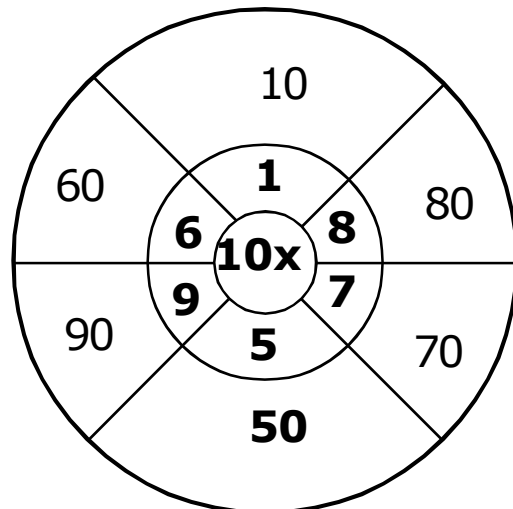
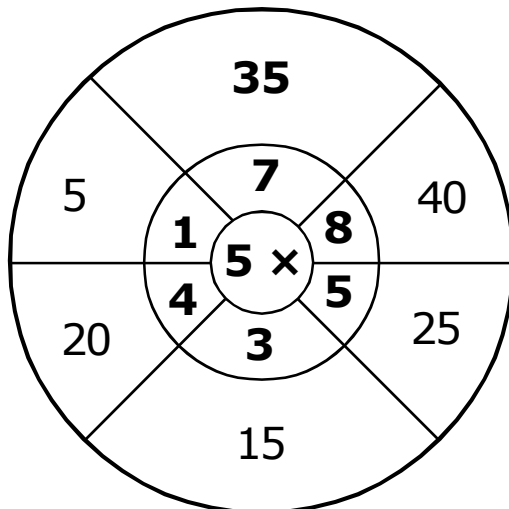
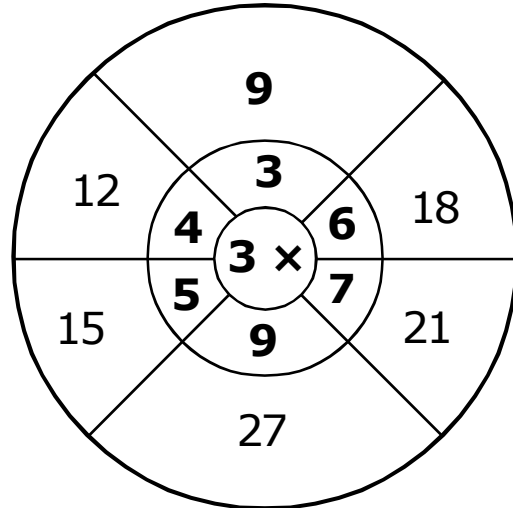
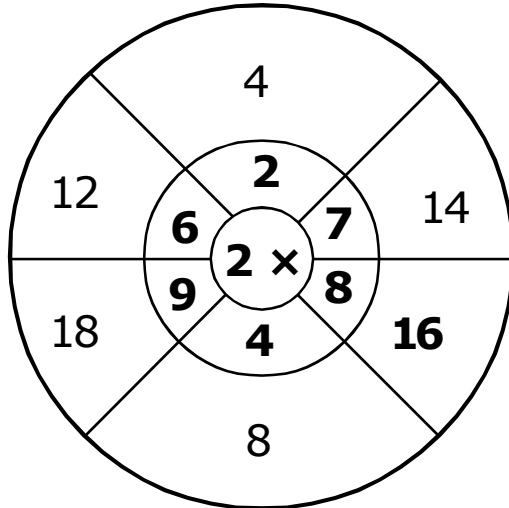


Std : 1

7

20

Complete each wheel as shown below.





Std : 1

8

30

PUT PROPER SIGN IN THE BOX :GREATER >
LESS <

$91 \boxed{>} 20$

$27 \boxed{<} 85$

$22 \boxed{>} 19$

$61 \boxed{<} 94$

$30 \boxed{<} 99$

$84 \boxed{>} 45$

$38 \boxed{>} 16$

$77 \boxed{>} 26$

$88 \boxed{>} 20$

$56 \boxed{>} 35$

$45 \boxed{>} 25$

$40 \boxed{>} 20$

$18 \boxed{<} 77$

$16 \boxed{<} 20$

$60 \boxed{>} 14$

$16 \boxed{<} 50$

$40 \boxed{<} 88$

$10 \boxed{<} 37$

$68 \boxed{<} 84$

$24 \boxed{<} 27$

$68 \boxed{>} 30$

$41 \boxed{>} 33$

$61 \boxed{>} 51$

$37 \boxed{>} 32$

$15 \boxed{<} 76$

$23 \boxed{>} 11$

$84 \boxed{>} 37$

$42 \boxed{<} 48$

$26 \boxed{>} 16$

$32 \boxed{>} 12$



Std : 1

9

40

Find smallest and greatest no.

	Smallest	Greatest		Smallest	Greatest
64, 34, 93, 94	<u>34</u>	<u>94</u>	25, 29, 33, 69	<u>25</u>	<u>69</u>
67, 93, 68, 86	<u>67</u>	<u>93</u>	48, 56, 45, 28	<u>28</u>	<u>56</u>
72, 27, 95, 59	<u>27</u>	<u>95</u>	65, 13, 51, 49	<u>13</u>	<u>65</u>
38, 81, 49, 53	<u>38</u>	<u>81</u>	13, 69, 41, 48	<u>13</u>	<u>69</u>
40, 60, 81, 43	<u>40</u>	<u>81</u>	27, 17, 61, 19	<u>17</u>	<u>61</u>
47, 38, 89, 90	<u>38</u>	<u>90</u>	28, 52, 50, 61	<u>28</u>	<u>61</u>
39, 56, 69, 74	<u>39</u>	<u>74</u>	35, 29, 18, 49	<u>18</u>	<u>49</u>
35, 28, 64, 74	<u>28</u>	<u>74</u>	61, 14, 38, 68	<u>14</u>	<u>68</u>
39, 83, 60, 85	<u>39</u>	<u>85</u>	96, 99, 43, 61	<u>43</u>	<u>99</u>
30, 50, 69, 59	<u>30</u>	<u>69</u>	71, 46, 95, 37	<u>37</u>	<u>95</u>

(A)

04



Std : 1

10

30

Find missing numbers.

- 1) 91, 92, 93, 94 , 95
- 2) 60 , 61 , 62, 63, 64
- 3) 21, 23, 25, 27 , 29
- 4) 73, 74, 75, 76 , 77
- 5) 56 , 57, 58, 59, 60
- 6) 32, 34, 36, 38 , 40
- 7) 11, 12, 13, 14 , 15
- 8) 47 , 48, 49, 50, 51,
- 9) 26, 28, 30, 32 , 34
- 10) 51, 52, 53, 54 , 55
- 11) 49 , 48 , 47, 46, 45
- 12) 70, 72, 74, 76 , 78
- 13) 86, 87, 88, 89 , 90
- 14) 80 , 81, 82, 83, 84
- 15) 54, 56, 58, 60 , 62

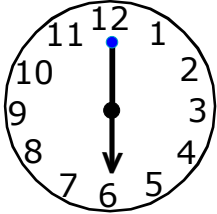


Std : 1

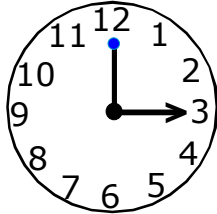
11

20

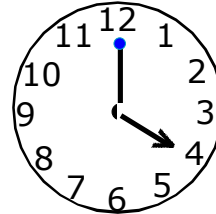
Write the time (9 marks)



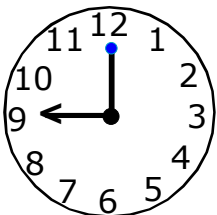
6 o'clock



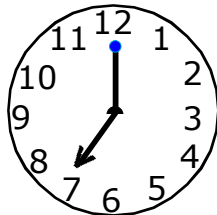
3 o'clock




4 o'clock



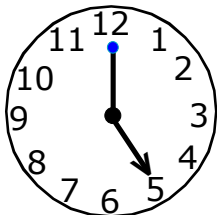
9 o'clock




7 o'clock



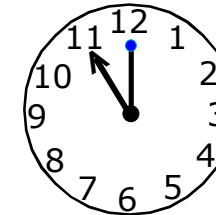
10 o'clock



5 o'clock



1 o'clock



11 o'clock

Match the following (11 marks)

$3 + 5$			9
$7 + 2$			8
$8 + 2$			6
$6 + 0$			7
$4 + 3$			10
$3 + 2$			5

$5 - 5$			7
$7 - 4$			0
$9 - 2$			3
$8 - 7$			5
$8 - 3$			1




Std : 1


12

20

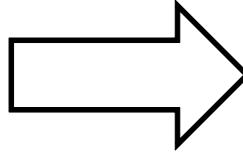
Count the sides.




8 sides.




4 sides.




7 sides.



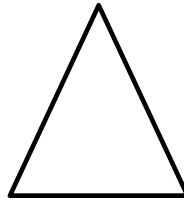
6 sides.



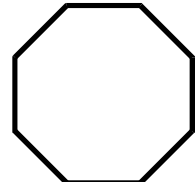
5 sides.



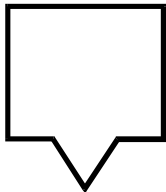
5 sides.



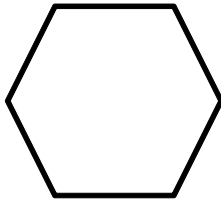
3 sides.




8 sides.



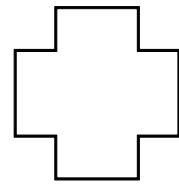
7 sides.



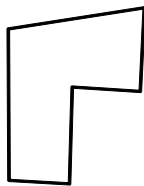
6 sides.



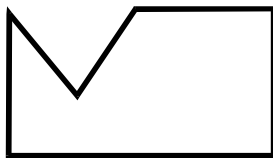
5 sides.



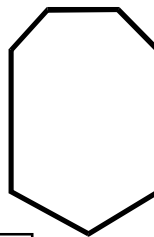
12 sides.




6 sides.



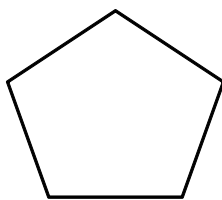
6 sides.



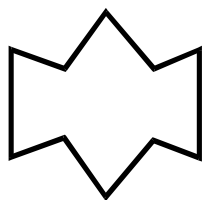
7 sides.




12 sides.



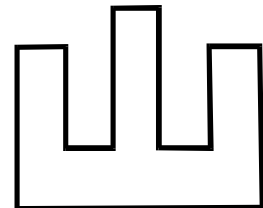
5 sides.



10 sides.



16 sides.



12 sides.