



Std : 1

1

30

Addition

3	6	4	3	2
+ 2	+ 4	+ 3	+ 3	+ 7
5	10	7	6	9

1	9	2	6	2
+ 7	+ 1	+ 5	+ 3	+ 4
8	10	7	9	6

7	6	8	1	2
+ 2	+ 2	+ 1	+ 1	+ 8
9	8	9	2	10

5	5	6	5	7
+ 1	+ 3	+ 1	+ 4	+ 0
6	8	7	9	7

Circle even number.

②	1	3	5	7
1	3	5	④	7
1	⑥	7	3	5
1	5	⑧	3	7
②	1	3	9	7

1	3	④	5	7
⑥	9	7	3	1
9	7	1	3	⑧
1	3	②	7	9
5	7	3	④	9



Std : 1

2

30

Subtraction

5	1	4	2	8
- 1	- 0	- 2	- 1	- 1
4	1	2	1	7

4	9	7	9	7
- 0	- 0	- 3	- 4	- 5
4	9	4	5	2

3	4	7	3	4
- 2	- 3	- 6	- 3	- 1
1	1	1	0	3

6	6	9	8	7
- 3	- 1	- 6	- 2	- 2
3	5	3	6	5

Circle odd number.

①	2	4	8	10
4	2	③	10	6
6	8	10	2	⑤
2	⑨	6	10	8
⑨	2	10	4	6

①	2	4	6	8
2	③	6	4	10
2	4	⑤	6	8
10	6	8	⑦	2
2	4	6	8	⑨



Std : 1

3

20

Addition (Horizontal)

$1 + 4 = \underline{5}$

$9 + 0 = \underline{9}$

$2 + 3 = \underline{5}$

$2 + 4 = \underline{6}$

$8 + 2 = \underline{10}$

$7 + 1 = \underline{8}$

$3 + 3 = \underline{6}$

$3 + 4 = \underline{7}$

$7 + 3 = \underline{10}$

$5 + 2 = \underline{7}$

$4 + 1 = \underline{5}$

$4 + 4 = \underline{8}$

$6 + 1 = \underline{7}$

$5 + 3 = \underline{8}$

$6 + 3 = \underline{9}$

$6 + 2 = \underline{8}$

$5 + 4 = \underline{9}$

$6 + 4 = \underline{10}$

$8 + 0 = \underline{8}$

$7 + 2 = \underline{9}$



Std : 1

4

20

Subtraction (Horizontal)

$7 - 5 = \underline{2}$

$8 - 1 = \underline{7}$

$6 - 5 = \underline{1}$

$7 - 2 = \underline{5}$

$9 - 7 = \underline{2}$

$9 - 8 = \underline{1}$

$8 - 4 = \underline{4}$

$5 - 2 = \underline{3}$

$5 - 4 = \underline{1}$

$6 - 3 = \underline{3}$

$4 - 3 = \underline{1}$

$9 - 6 = \underline{3}$

$7 - 6 = \underline{1}$

$8 - 2 = \underline{6}$

$8 - 3 = \underline{5}$

$7 - 3 = \underline{4}$

$6 - 4 = \underline{2}$

$4 - 2 = \underline{2}$

$7 - 4 = \underline{3}$

$5 - 3 = \underline{2}$



Std : 1

5

20

Find no. more than.5 **more** than 4 9 **more** than 3 6 **more** than 3 7 **more** than 0 7 **more** than 2 5 **more** than 1 8 **more** than 2 9 **more** than 2 9 **more** than 1 6 **more** than 1 4 **more** than 4 8 **more** than 3 5 **more** than 3 7 **more** than 1 7 **more** than 3 4 **more** than 3 9 **more** than 0 5 **more** than 2 8 **more** than 1 6 **more** than 2



Std : 1

6

20

Find no. less than.1 **less** than 7 1 **less** than 6 2 **less** than 8 2 **less** than 4 3 **less** than 9 4 **less** than 5 4 **less** than 8 3 **less** than 7 4 **less** than 9 2 **less** than 2 3 **less** than 6 1 **less** than 4 2 **less** than 6 4 **less** than 6 1 **less** than 8 2 **less** than 9 4 **less** than 4 3 **less** than 5 3 **less** than 4 1 **less** than 5

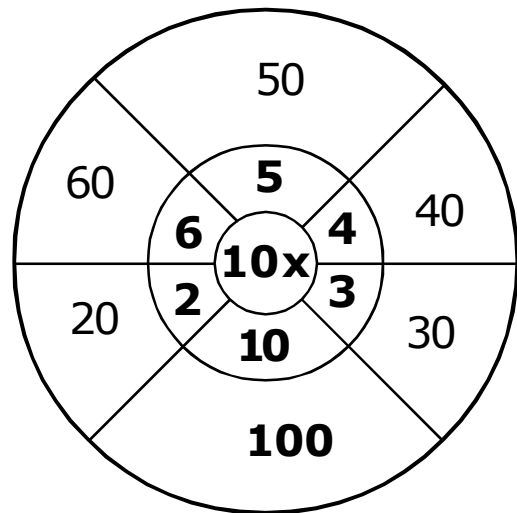
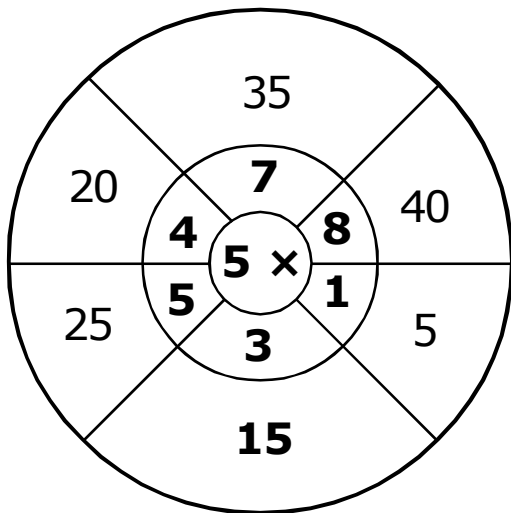
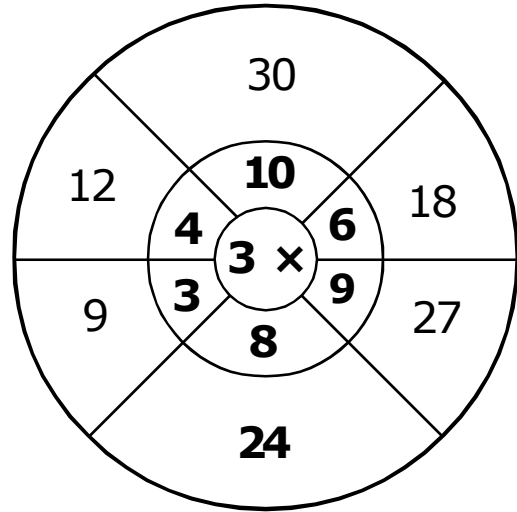
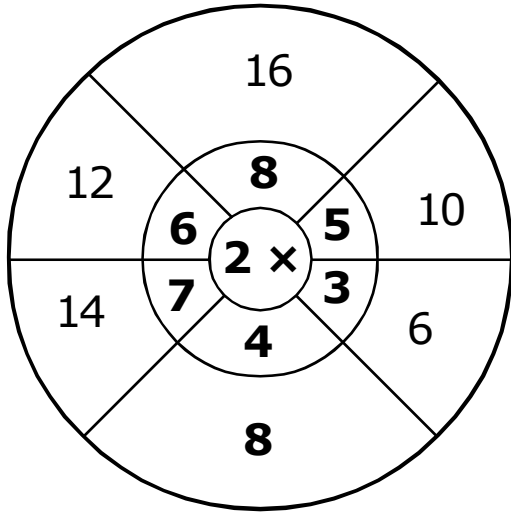


Std : 1

7

20

Complete each wheel as shown below.





Std : 1

8

30

PUT PROPER SIGN IN THE BOX :GREATER >
LESS <

42 24

48 86

42 25

31 45

28 17

96 27

34 12

63 31

53 38

45 43

13 39

36 72

48 89

42 41

22 28

74 35

65 54

29 96

31 13

70 40

91 12

19 98

91 12

89 99

74 27

99 22

17 27

88 76

19 29

27 36



Std : 1

9

40

Find smallest and greatest no.

	Smallest	Greatest		Smallest	Greatest
48, 86, 19, 98	<u>19</u>	<u>98</u>	43, 13, 36, 23	<u>13</u>	<u>43</u>
83, 29, 96, 48	<u>29</u>	<u>96</u>	38, 85, 29, 96	<u>29</u>	<u>96</u>
45, 43, 92, 99	<u>43</u>	<u>99</u>	34, 48, 79, 17	<u>17</u>	<u>79</u>
46, 64, 65, 36	<u>36</u>	<u>65</u>	42, 25, 34, 22	<u>22</u>	<u>42</u>
91, 12, 26, 13	<u>12</u>	<u>91</u>	13, 39, 22, 28	<u>13</u>	<u>39</u>
74, 27, 19, 89	<u>19</u>	<u>89</u>	52, 24, 39, 23	<u>23</u>	<u>52</u>
43, 32, 18, 16	<u>16</u>	<u>43</u>	63, 36, 13, 31	<u>13</u>	<u>63</u>
54, 45, 72, 81	<u>45</u>	<u>81</u>	31, 91, 45, 43	<u>31</u>	<u>91</u>
84, 88, 18, 20	<u>18</u>	<u>88</u>	24, 45, 89, 18	<u>18</u>	<u>89</u>
42, 86, 19, 98	<u>19</u>	<u>98</u>	65, 46, 96, 69	<u>46</u>	<u>96</u>



Std : 1

10

30

Find missing numbers.

- 1) 10, 11, 12, 13 , 14
- 2) 61 , 62, 63, 64, 65
- 3) 29, 31, 33, 35 , 37
- 4) 81, 82, 83, 84 , 85
- 5) 91 , 92, 93, 94, 95
- 6) 42, 44, 46, 48 , 50
- 7) 24, 25, 26, 27 , 28
- 8) 35 , 36 , 37, 38, 39
- 9) 23, 25, 27, 29 , 31
- 10) 31, 32, 33, 34 , 35
- 11) 75 , 74, 73, 72, 71
- 12) 39, 41, 43, 45 , 47
- 13) 68, 69, 70, 71 , 72
- 14) 69 , 70 , 71, 72, 73
- 15) 24, 26, 28, 30 , 32

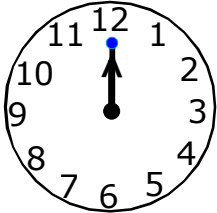


Std : 1

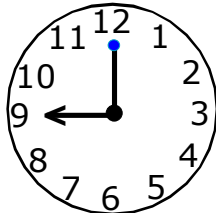
11

20

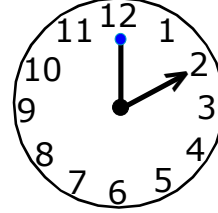
Write the time (9 marks)



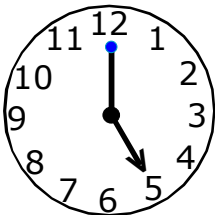
12 'o' clock



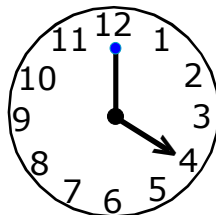
9 'o' clock



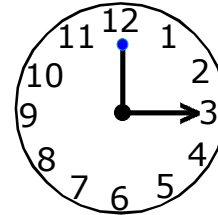
2 'o' clock



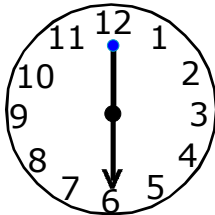
5 'o' clock



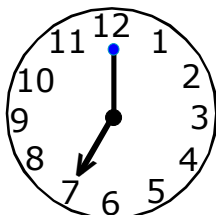
4 'o' clock



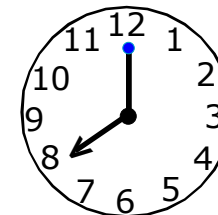
3 'o' clock



6 'o' clock



7 'o' clock



8 'o' clock

Match the following (11 marks)

$3 + 3$	⊙	⊙	9
$3 + 4$	⊙	⊙	6
$7 + 2$	⊙	⊙	3
$3 + 1$	⊙	⊙	7
$4 + 4$	⊙	⊙	4
$2 + 1$	⊙	⊙	8

$9 - 8$	⊙	⊙	3
$7 - 2$	⊙	⊙	4
$6 - 3$	⊙	⊙	1
$3 - 3$	⊙	⊙	5
$9 - 5$	⊙	⊙	0




Std : 1

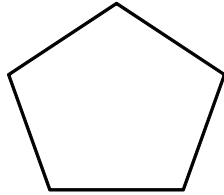
12

20

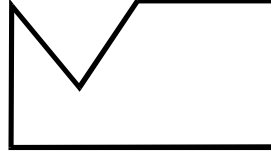
Count the sides.



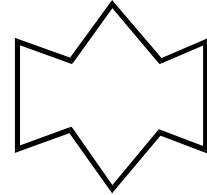
5 sides.



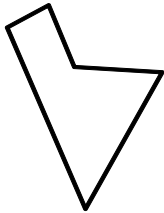
5 sides.



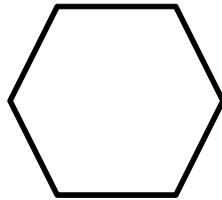
6 sides.




10 sides.



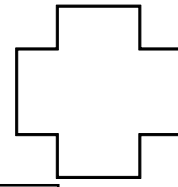
5 sides.




6 sides.




16 sides.



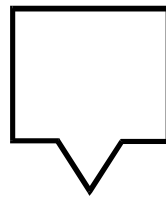
12 sides.




4 sides.



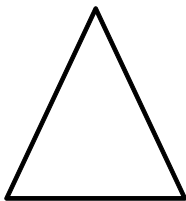
6 sides.



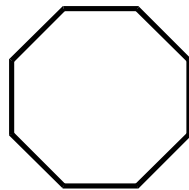
7 sides.



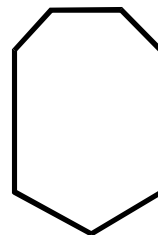
8 sides.



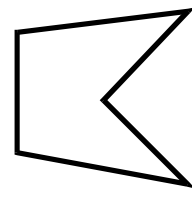
3 sides.




8 sides.




7 sides.



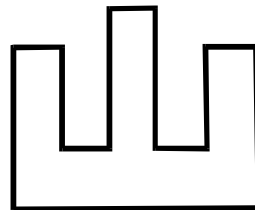
5 sides.



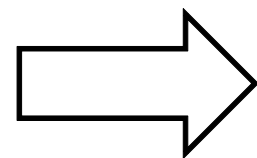
12 sides.



6 sides.



12 sides.



7 sides.