



Std : 1

1

30

**Addition**

2	6	8	7	6
+ 5	+ 3	+ 1	+ 1	+ 2

2	5	3	5	3
+ 2	+ 4	+ 3	+ 2	+ 5

7	4	3	2	1
+ 2	+ 3	+ 4	+ 3	+ 6

6	1	4	6	1
+ 0	+ 7	+ 2	+ 1	+ 4

**Circle even number.**

1	3	6	5	7
9	1	2	3	5
9	3	5	7	8
7	4	5	3	9
3	5	7	9	2

9	5	6	7	3
8	3	1	5	7
1	7	5	4	3
3	1	2	5	7
9	1	7	5	6



Std : 1

2

30

**Subtraction**

$\begin{array}{r} 9 \\ - 5 \end{array}$	$\begin{array}{r} 8 \\ - 3 \end{array}$	$\begin{array}{r} 4 \\ - 4 \end{array}$	$\begin{array}{r} 2 \\ - 1 \end{array}$	$\begin{array}{r} 6 \\ - 4 \end{array}$

$\begin{array}{r} 3 \\ - 2 \end{array}$	$\begin{array}{r} 7 \\ - 5 \end{array}$	$\begin{array}{r} 4 \\ - 2 \end{array}$	$\begin{array}{r} 8 \\ - 6 \end{array}$	$\begin{array}{r} 6 \\ - 6 \end{array}$

$\begin{array}{r} 6 \\ - 0 \end{array}$	$\begin{array}{r} 7 \\ - 4 \end{array}$	$\begin{array}{r} 9 \\ - 8 \end{array}$	$\begin{array}{r} 8 \\ - 3 \end{array}$	$\begin{array}{r} 3 \\ - 1 \end{array}$

$\begin{array}{r} 2 \\ - 1 \end{array}$	$\begin{array}{r} 4 \\ - 3 \end{array}$	$\begin{array}{r} 7 \\ - 6 \end{array}$	$\begin{array}{r} 6 \\ - 5 \end{array}$	$\begin{array}{r} 8 \\ - 1 \end{array}$

**Circle odd number.**

1	2	8	6	10
3	4	8	6	2
2	6	10	8	5
6	4	2	10	7
4	8	10	2	9

2	4	5	10	8
8	7	2	4	10
3	4	10	6	2
4	2	10	7	8
8	2	1	4	6



Std : 1

3

20

**Addition (Horizontal)**

$7 + 2 = \underline{\quad}$

$4 + 4 = \underline{\quad}$

$8 + 2 = \underline{\quad}$

$3 + 2 = \underline{\quad}$

$6 + 3 = \underline{\quad}$

$5 + 5 = \underline{\quad}$

$5 + 1 = \underline{\quad}$

$6 + 4 = \underline{\quad}$

$8 + 1 = \underline{\quad}$

$4 + 1 = \underline{\quad}$

$7 + 1 = \underline{\quad}$

$6 + 1 = \underline{\quad}$

$6 + 2 = \underline{\quad}$

$5 + 4 = \underline{\quad}$

$4 + 3 = \underline{\quad}$

$4 + 2 = \underline{\quad}$

$5 + 2 = \underline{\quad}$

$3 + 3 = \underline{\quad}$

$7 + 3 = \underline{\quad}$

$5 + 3 = \underline{\quad}$



Std : 1

4

20

**Subtraction (Horizontal)**

$8 - 7 = \underline{\quad}$

$5 - 2 = \underline{\quad}$

$7 - 6 = \underline{\quad}$

$6 - 3 = \underline{\quad}$

$8 - 3 = \underline{\quad}$

$6 - 5 = \underline{\quad}$

$4 - 3 = \underline{\quad}$

$7 - 4 = \underline{\quad}$

$6 - 2 = \underline{\quad}$

$5 - 1 = \underline{\quad}$

$9 - 8 = \underline{\quad}$

$6 - 2 = \underline{\quad}$

$6 - 4 = \underline{\quad}$

$8 - 4 = \underline{\quad}$

$5 - 3 = \underline{\quad}$

$9 - 7 = \underline{\quad}$

$9 - 6 = \underline{\quad}$

$4 - 2 = \underline{\quad}$

$7 - 5 = \underline{\quad}$

$4 - 1 = \underline{\quad}$



Std : 1

5

20

**Find no. more than.**1 **more** than 7 2 **more** than 6 3 **more** than 5 4 **more** than 4 2 **more** than 3 3 **more** than 2 4 **more** than 1 1 **more** than 6 2 **more** than 5 4 **more** than 3 3 **more** than 4 1 **more** than 5 4 **more** than 2 3 **more** than 6 1 **more** than 6 2 **more** than 4 1 **more** than 8 2 **more** than 6 3 **more** than 1 4 **more** than 2



Std : 1

6

20

**Find no. less than.**4 **less** than 7 1 **less** than 5 3 **less** than 6 2 **less** than 6 2 **less** than 8 3 **less** than 7 1 **less** than 4 4 **less** than 8 4 **less** than 9 3 **less** than 5 3 **less** than 3 4 **less** than 6 2 **less** than 4 6 **less** than 9 1 **less** than 2 2 **less** than 3 4 **less** than 5 1 **less** than 3 3 **less** than 4 4 **less** than 9

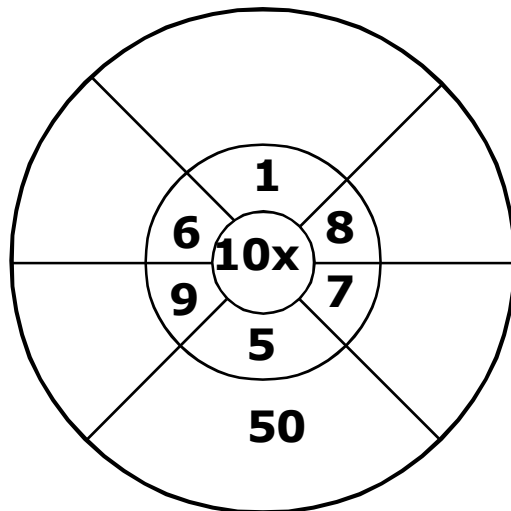
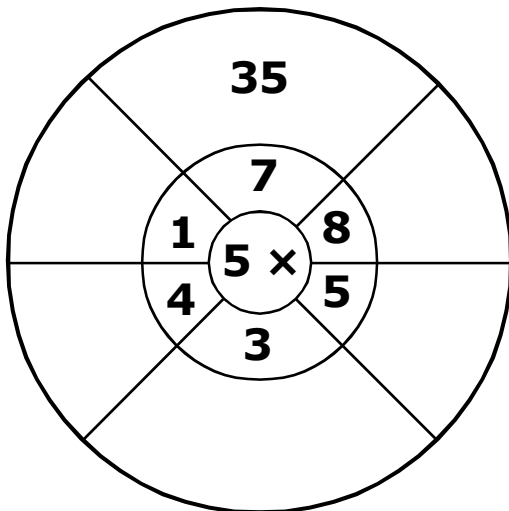
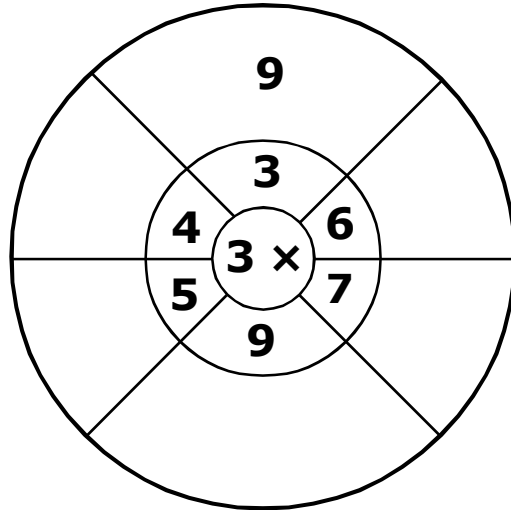
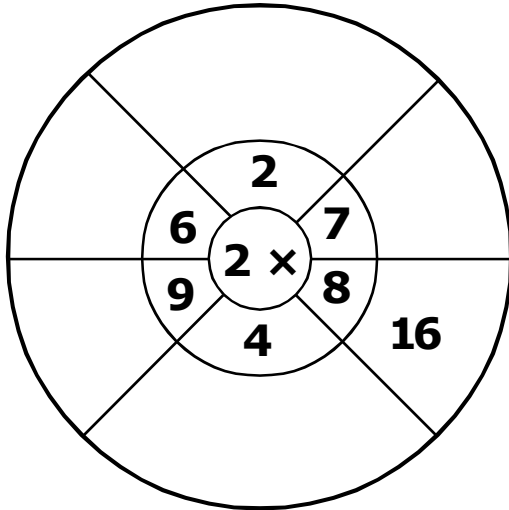


Std : 1

7

20

Complete each wheel as shown below.





Std : 1

8

30

**PUT PROPER SIGN IN THE BOX :**GREATER >  
LESS <

$91 \square 20$

$27 \square 85$

$22 \square 19$

$61 \square 94$

$30 \square 99$

$84 \square 45$

$38 \square 16$

$77 \square 26$

$88 \square 20$

$56 \square 35$

$45 \square 25$

$40 \square 20$

$18 \square 77$

$16 \square 20$

$60 \square 14$

$16 \square 50$

$40 \square 88$

$10 \square 37$

$68 \square 84$

$24 \square 27$

$68 \square 30$

$41 \square 33$

$61 \square 51$

$37 \square 32$

$15 \square 76$

$23 \square 11$

$84 \square 37$

$42 \square 48$

$26 \square 16$

$32 \square 12$





Std : 1

9

40

**Find smallest and greatest no.**

	Smallest	Greatest		Smallest	Greatest
64, 34, 93, 94	_____	_____	25, 29, 33, 69	_____	_____
67, 93, 68, 86	_____	_____	48, 56, 45, 28	_____	_____
72, 27, 95, 59	_____	_____	65, 13, 51, 49	_____	_____
38, 81, 49, 53	_____	_____	13, 69, 41, 48	_____	_____
40, 60, 81, 43	_____	_____	27, 17, 61, 19	_____	_____
47, 38, 89, 90	_____	_____	28, 52, 50, 61	_____	_____
39, 56, 69, 74	_____	_____	35, 29, 18, 49	_____	_____
35, 28, 64, 74	_____	_____	61, 14, 38, 68	_____	_____
39, 83, 60, 85	_____	_____	96, 99, 43, 61	_____	_____
30, 50, 69, 59	_____	_____	71, 46, 95, 37	_____	_____

(A)

04



Std : 1

10

30

**Find missing numbers.**

- 1) 91, 92, 93, \_\_\_\_\_, \_\_\_\_\_
- 2) \_\_\_\_\_, \_\_\_\_\_, 62, 63, 64
- 3) 21, 23, 25, \_\_\_\_\_, \_\_\_\_\_
- 4) 73, 74, 75, \_\_\_\_\_, \_\_\_\_\_
- 5) \_\_\_\_\_, \_\_\_\_\_, 58, 59, 60
- 6) 32, 34, 36, \_\_\_\_\_, \_\_\_\_\_
- 7) 11, 12, 13, \_\_\_\_\_, \_\_\_\_\_
- 8) \_\_\_\_\_, \_\_\_\_\_, 49, 50, 51,
- 9) 26, 28, 30, \_\_\_\_\_, \_\_\_\_\_
- 10) 51, 52, 53, \_\_\_\_\_, \_\_\_\_\_
- 11) \_\_\_\_\_, \_\_\_\_\_, 47, 46, 45
- 12) 70, 72, 74, \_\_\_\_\_, \_\_\_\_\_
- 13) 86, 87, 88, \_\_\_\_\_, \_\_\_\_\_
- 14) \_\_\_\_\_, \_\_\_\_\_, 82, 83, 84
- 15) 54, 56, 58, \_\_\_\_\_, \_\_\_\_\_

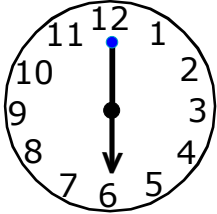


Std : 1

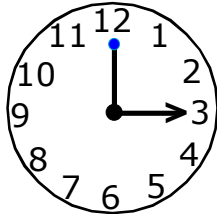
11

20

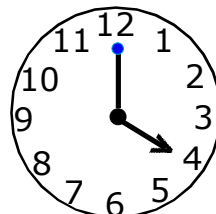
Write the time (9 marks)



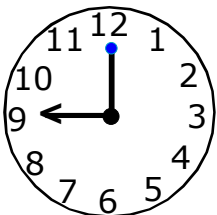
o' clock



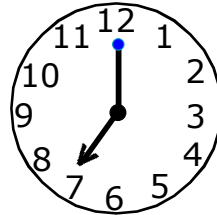
o' clock




o' clock



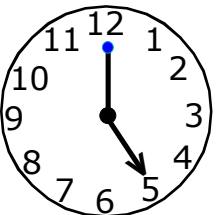
o' clock




o' clock



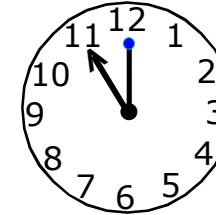
o' clock



o' clock



o' clock



o' clock

Match the following (11 marks)

3 + 5 <input type="radio"/>	<input type="radio"/> 9	5 - 5 <input type="radio"/>	<input type="radio"/> 7
7 + 2 <input type="radio"/>	<input type="radio"/> 8	7 - 4 <input type="radio"/>	<input type="radio"/> 0
8 + 2 <input type="radio"/>	<input type="radio"/> 6	9 - 2 <input type="radio"/>	<input type="radio"/> 3
6 + 0 <input type="radio"/>	<input type="radio"/> 7	8 - 7 <input type="radio"/>	<input type="radio"/> 5
4 + 3 <input type="radio"/>	<input type="radio"/> 10	8 - 3 <input type="radio"/>	<input type="radio"/> 1
3 + 2 <input type="radio"/>	<input type="radio"/> 5		




Std : 1


12

20

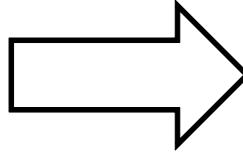
Count the sides.




sides.




sides.




sides.



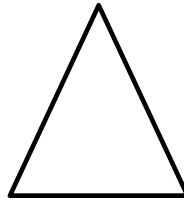
sides.



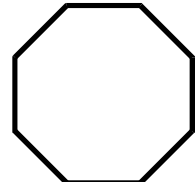
sides.



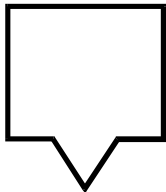
sides.



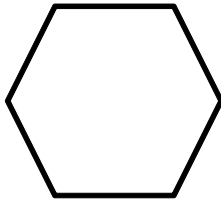
sides.




sides.




sides.




sides.



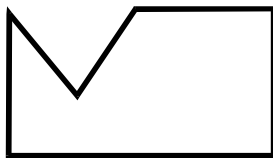
sides.



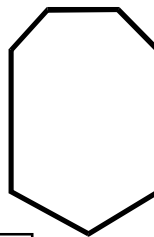
sides.




sides.



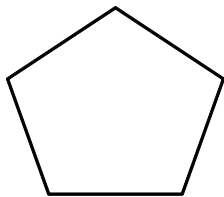
sides.



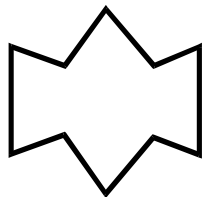
sides.




sides.



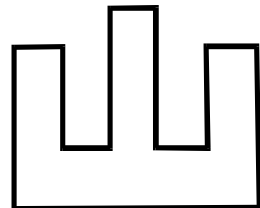
sides.



sides.



sides.



sides.